

Homework

Week beginning Monday 10th May

Due: Thursday 20th May

Spelling

January, February, March, April, May, June, July, August, September, October, November, December.

Write the words neatly 3 times in columns using "look, say, cover, write, check" method.

Reading

Please keep up your reading every night, for at least 15 minutes. Make sure you record this in your homework reading sheet and have a parent sign this.

Punctuation

Punctuate the following rhyme and set it out in a poem format:

thirty days has september april june and november all the rest have
thirtyone except February which has twentyeight and in a leap year
twenty-nine.

Integrated Studies

Answer these questions neatly in your own words in your Homework book.
You will have to research using library books or the internet. Please use
complete sentences when writing your answers.

1. Why do we have 365 days in a year?
2. Why do we have 12 months in a year?
3. Draw and label the four main stages of the moon.

MATHS

Keep practising your times tables, especially 7's, 8's and 9's.

Ask Mum or Dad to test you and time you on saying them out aloud.

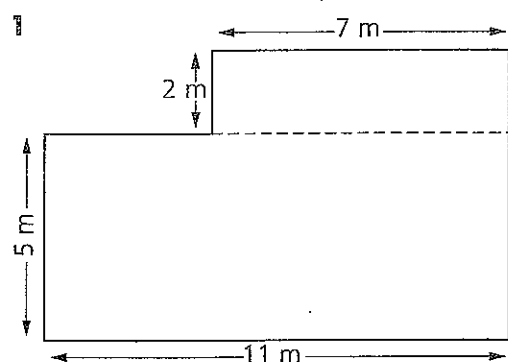
AREA & PERIMETER

Please complete the following questions on the sheet. Use a grey lead pencil and write neatly. Please show working out in your Homework book.

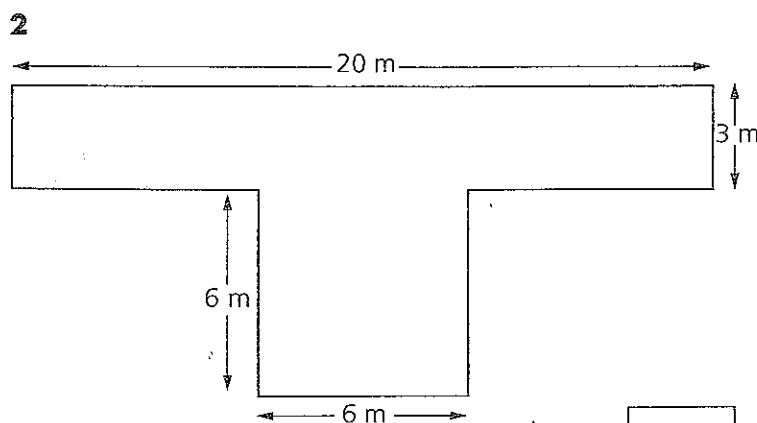
Write the rule for area:

Measurement Calculating areas

Calculate the area of each shape in square metres (m²).

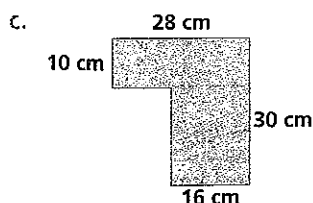
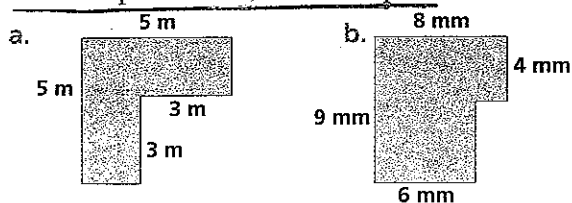


Area =

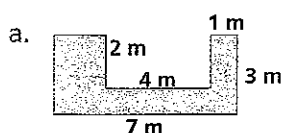


Area =

Find the perimeter of these shapes.



2 Work out the perimeter of these shapes.



- 1 9×5
- 2 $16 - 9$
- 3 $14 + 8$
- 4 4^2
- 5 $16 \square 4 = 12$
- 6 $18 \square 3 = 6$
- 7 Divide 35 by 7
- 8 $20 \square 20 = 40$
- 9 $\frac{1}{4} \times \$28$
- 10 Quotient of 25 and 5
- 11 Factors of 9
- 12 Are 18 and 24 multiples of 6?
- 13 Is 21 a prime number?
- 14 How many cm in 7 m?
- 15

Phillip spent \$6.50 and \$4.50. What was the total amount he spent?

\$

